

Monday 24th January

LO: To compare and contrast
human features.

Temperature (°C)	Description

Take temperature of outside

We are studying: Geography

We are learning about: Wild Weather



Last lesson we:

What physical features are.

Identify physical features of the UK and Nepal.

Compare and contrast physical features.

Link physical features to Wild Weathers.

Today we will learn:

What human features are.

Identify human features of the UK and Nepal.

Compare and contrast human features.

Link human features to Wild Weathers.

We need to know this because:

Human features are the way we work on the planet.



Can you remember where on the map the UK and Nepal are?


Which of these are physical features and which are human features?



factory



shop



vegetation




ocean



cliff



river



hills



town



house



farm



city



mountain



beach



village

So, what are human features?

-
-
-
-
-
-
-

Human features of UK

Tower Bridge

London - 8.982 million

M1 Motorway

House



he title Human features of UK

r

a

of
uman

, and

t.

Human features of Nepal

Kushma-Gyadi Bridge

Kathmandu - Population 1.442 million

Mahendra Highway

Hut



re title Human features of Nepal

l
of
uman
and
t.

In your books, identify these:

Similar features

-
-
-

Annotate your drawings to show what makes them different.

Why are they different?

What wild weather do these places have?
Why?
How do the human features contribute to these?

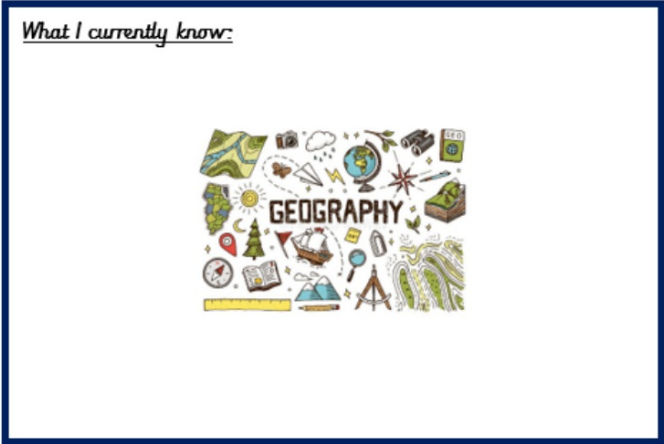


Discuss/write a sentence explaining.

Add in what you have learnt from this lesson.

What I know now:

|



Our class text

Friday 28th January

LO: To identify and use
symbols and grid references.

Temperature (°C)	Description

Take temperature of outside

We are studying: Geography

We are learning about: Wild Weather



Last lesson we:

What human features are.

Identify human features of the UK and Nepal.

Compare and contrast human features.

Link human features to Wild Weathers.

Today we will learn:

Symbols on an Ordnance survey map.

4 figure grid references.

We need to know this because:

Maps are a way of navigating.

What do you think these are?
Where might you see them?



Sch



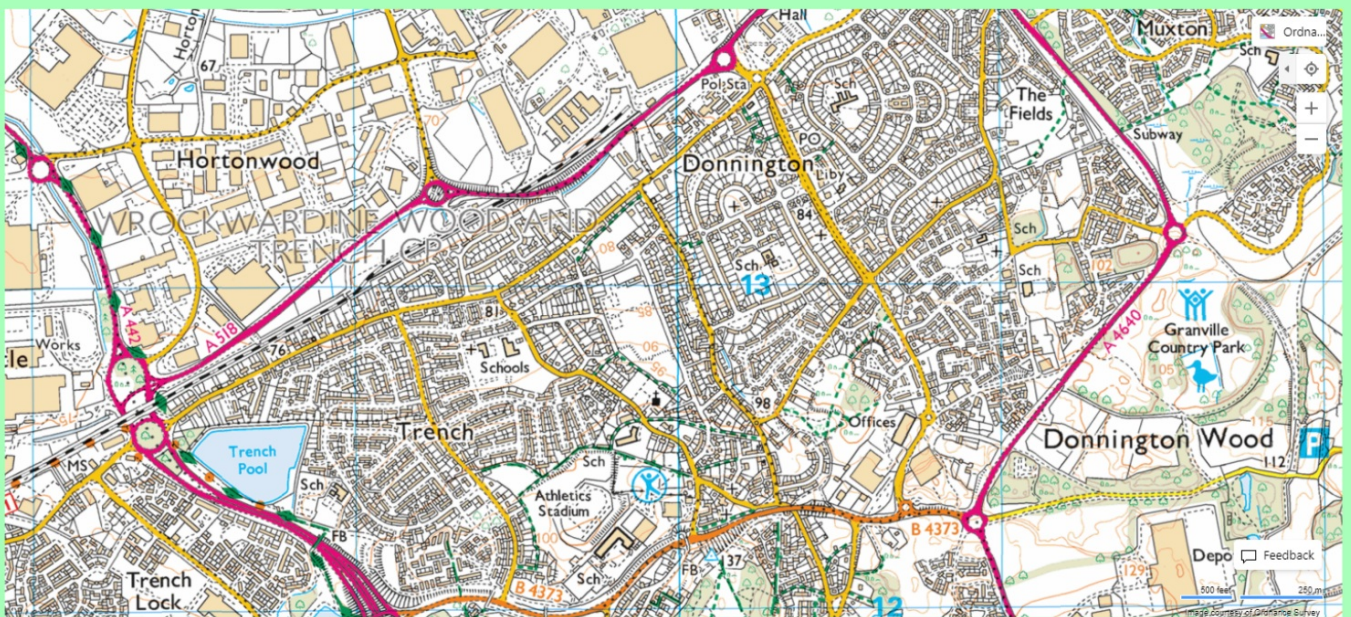
What do you think these are now?



Sch



P





What can you see on this map?

What is at grid reference:

1. 6409
2. 6604
3. 6908
4. 6104
5. 6807
6. 7209
7. 6704
8. 6208
9. 6509
10. 7205


Glue the grid references into your book and identify as many things as you can in that box.

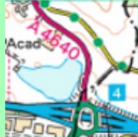


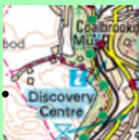
What is at grid reference:


1. 6409
2. 6604
3. 6908
4. 6104
5. 6807
6. 7209
7. 6704
8. 6208
9. 6509
10. 7205

Use a coloured pencil to mark your answers!

1.  Parking
Nature reserve
Golf course
Footpath


6.  Pool
Motorway

2.  Information centre
Picnic site
Road

7.  Church with tower
Youth hostel

3.  Information centre
Bus station

8.  Viewpoint or summit
Trees

4.  River
Telephone
Embankment

9.  Nature reserve
Woods

5.  School
Road

10.  Main road

It is your turn to make your own map!

You need to include items from the Ordnance Survey map, grid references and colour.

